

SRI KRISHNAVENI BANKING COACHING CENTRE

YEMMIGANUR, CELL: 9885303408. www.krishnaveni632.yolasite.com

MAXMARKS:200

MODEL PAPER-7

TIME:135 MINI

GENERAL AWARENESS

- 1) The united state will use Mihail Kogalniceanu (MK) Air base for afghan pull out. MK air base is in ?
 - 1) Kyrgyzstan 2) Romania 3) Russia
 - 4) Ukraine 5) Moldova
- 2) The statutory liquidity ratio(SLR) should be maintained in the form of ?
 - 1) Cash 2) Gold 3) Government securities
 - 4) Any of the above 5) None of the above
- 3) Which of the following can be called a demand liability?
 - 1) Deposit maintained in savings account
 - 2) Deposit maintained in current account
 - 3) Fixed deposit for six months
 - 4) Both 1 and 2 5) All 1, 2 and 3
- 4) Mulatu teshome has been the president of which of the following African countries since October 7, 2013?
 - 1) Somalia 2) Liberia 3) Gambia 4) Ethiopia
 - 5) Zambia
- 5) Ruchira kamboj has been appointed as the permanent Representative of India to ?
 - 1) UNICEF 2) UNEP 3) UNESCO
 - 4) WHO 5) FAO
- 6) The Indian Newspaper society (INS) is an organization that plays a major role in protecting and promoting the freedom of press in india. It was founded in 1939 with headquarters in ?
 - 1) Mumbai 2) New Delhi 3) Kolkata
 - 4) Chennai 5) Jaipur
- 7) Which of the following award/prizes is popularly called the jewish Nobel prize?
 - 1) Pritzker prize 2) Templeton prize
 - 3) Abel prize 4) Goldman Environmental prize
 - 5) Genesis prize
- 8) The first national Yash Chopra memorial award was presented to which of the following film personalities in October 2013?
 - 1) Amitabh bachehan 2) Gulzar
 - 3) Lata mangeshkar 4) A.R.Rehman
 - 5) Tanuja
- 9) The University of British Columbia's faculty of law awarded the inaugural Allard prize for international integrity to which of the following Indians in September 2013 ?
 - 1) Kiran bedi 2) Medha patkar
 - 3) Arvind Kejriwal 4) Anna hazare
 - 5) Chandi Prasad bhat
- 10) Who won the International press Insititute (IPI) India Award for Excellence in Journalism in October 2013?
 - 1) Rajdeep Sardesai 2) Karan Thapar
 - 3) Sagarlika Ghose 4) Fareed Zakaria
 - 5) Prannoy Roy
- 11) Global Competitiveness Report (GCR) is an annual report published by the ?
 - 1) World Bank 2) IMF 3) WTO
 - 4) WEF 5) None of these
- 12) Which of the following is an inter-school football tournament in India?
 - 1) Subroto cup 2) Santosh Trophy
 - 3) Durand cup 4) B.C.Roy Trophy
 - 5) Rovers cup
- 13) Who won the prestigious Velod'Or award in 2013?
 - 1) Nairo Quintana 2) Chris Froome
 - 3) Alberto Contador 4) Bradley Wiggins
 - 5) Philippe Gilbert
- 14) Who among the following is not a Golf player?
 - 1) Ryan Moore 2) Scott Hend
 - 3) Anirban Lahiri 4) Adam Scott
 - 5) Fernando Alonso
- 15) Who is the Chairman of the Railway Board ?
 - 1) Alok Johri 2) Subodh kumar jain
 - 3) A.K. Mittal 4) Arunendra kumar
 - 5) Noen of these
- 16) Subhash Goswami is the Director General of the ?
 - 1) Border security Force
 - 2) National security Guard
 - 3) Indo-Tibetan Border Police
 - 4) Central Industrial security Force
 - 5) None of these
- 17) India has resumed military assistance to which Of the following countries in October 2013, after nine years of suspension
 - 1) Nepal 2) Bangladesh 3) Sri Lanka
 - 4) Pakistan 5) Burma
- 18) Who is the co-author of the book 'I am Malala: The Girl who stood up for Education and was shot by the Taliban '?
 - 1) Graham Philips 2) Christian Lamb
 - 3) John Kay 4) Felicity Green

- 5) David Astor
- 19) Which of the following have been named as the new 'hope spots' by the International Union for Conservation of Nature (IUCN)?
 1) Andaman & Nicobar Islands
 2) Lakshadweep 3) Dadra & Nagar Haveli
 4) Both 1 and 2 5) All 1,2 and 3
- 20) The Supreme Court directed the Centre and state governments to provide what percent job reservations to disabled persons in their departments, companies and PSUs?
 1) One 2) Two 3) Three
 4) Four 5) None of these
- 21) The world Health Organization (WHO) has approved SA14-142, a new cheaper vaccine against Japanese Encephalitis made in ?
 1) India 2) China 3) USA 4) Russia 5) Japan
- 22) Which of the following refers to a long with a Low interest rate?
 1) Hot Money 2) Call Money 3) Dear Money
 4) Cheap Money 5) None of these
- 23) With regard to Banking in India, which one of the following events took place in 1975?
 1) Establishment of NABARD
 2) Second phase of Nationalization of Banks
 3) Nationalization of SBI
 4) Establishment of the first Regional Rural Bank
 5) Merger of new bank of India with Punjab National Bank
- 24) NPCDCS program does not aim at preventing And controlling which one of the following diseases ?
 1) Cancer 2) Diabetes
 3) Cardiovascular diseases 4) Stroke
 5) Polio
- 25) Kannur has been declared the first zero-landless district in India Kannur is in ?
 1) Karnataka 2) Tamil Nadu 3) Goa
 4) Maharashtra 5) Kerala
- 26) The Union Cabinet has approved a proposal To create a Legislative Council in which of the following state in November 2013?
 1) Nagaland 2) Tripura 3) Meghalaya
 4) Assam 5) Manipur
- 27) Nagzira tiger reserve is the fifth tiger reserve In the state of?
 1) Chhattisgarh 2) Rajasthan 3) Maharashtra
 4) Madhya Pradesh 5) Himachal Pradesh
- 28) Exporters in India get insurance cover and risk cover from?
 1) LIC 2) SIDBI 3) NABARD
 4) DICGC 5) ECGC
- 29) Which is the first country in the world to Introduce Tobin tax in 2013?
 1) India 2) Italy 3) Germany
 4) Slovenia 5) Slovakia
- 30) Bharatiya Mahila bank is headquartered in ?
 1) Mumbai 2) New Delhi 3) Hyderabad
 4) Kolkata 5) Chennai
- 31) Julie Bishop visited India recently. She is the Foreign Affairs Minister of?
 1) Jamaica 2) UK 3) New Zealand
 4) Australia 5) Canada
- 32) The Marmaray railway tunnel underneath the Bosphorus Straits connects Europe and Asia. It is in ?
 1) Russia 2) Kazakhstan 3) Turkey
 4) Armenia 5) Azerbaijan
- 33) Frederick Sanger of UK died on November 19, 2013. He was awarded the Nobel Prize Twice in 1958 and 1980 in ?
 1) Physics 2) Chemistry 3) Medicine
 4) Literature 5) Economics
- 34) The theme of which of the following 2013 summits was "Growth with Equity: Inclusive Development" ?
 1) G20 2) G8 3) ASEAN
 4) East Asia Summit 5) Commonwealth
- 35) J-20 is a stealth fighter aircraft launched by ?
 1) China 2) USA 3) Paksitan 4) Russia 5) India
- 36) Which country has rejected a United Nations resolution urging it to grant citizenship to the Rohingya. A muslim minority group?
 1) Indonesia 2) Malaysia 3) Myanmar
 4) Sri Lanka 5) Philippines
- 37) Which of the following organizations conducted Cyber Coalition 2013, the largest - ever cyber exercises to practice averting large-scale, simultaneous cyber attacks on member states
 1) SCO 2) NATO 3) EUROPEAN UNION
 4) ASEAN 5) APEC
- 38) Lawrence Klein of USA passed away on October 20, 2013. He was awarded the Nobel Prize in 1980 in
 1) Physics 2) Chemistry 3) Medicine
 4) Economics 5) None of these
- 39) Doris Lessing of UK died on November 17, 2013. In 2007, she became the oldest recipient of the Nobel Prize in which of the following categories ?
 1) Physics 2) Physiology 3) Literature
 4) Chemistry 5) Peace
- 40) Srishati Rana of India won which of the following awards in 2013?
 1) Miss India 2) Miss world 3) Miss America
 4) Miss Earth 5) Miss Asia pacific world

ENGLISH LANGUAGE

Directions(41-52): Read the following passage carefully and answer the questions given below it. Certain words/phrases have been printed in **bold** to help you locate them while answering some of the questions.

Long ago there was a poor Brahmin named Krishnan. He could not find enough work to do. Sometimes, he and his family had to go without food. At last Krishnan decided to leave his village in search of work. Early next morning, he left the house. He walked the whole day until he came to a thick jungle. He was tired, thirsty and hungry. While looking around for water to drink, he found a well. He went to drink, he found a well. He went to the well and looked in. There he saw a jaguar, a monkey, a snake and a man. They had all fallen in to the well. "O, noble Brahmin," the jaguar called out to him, "Please help me out, so that I can go back to my family." "But you are a jaguar," said Krishnan. "How do I know you will not kill me?" "Don't be afraid of me, I promise I will not do you any harm," replied the jaguar. Krishnan reached into the well and pulled out the jaguar. The jaguar thanked him and said, "I'm Shersingh. I live in a cave in the mountain. I shall be most delighted if I can repay my debt to you someday." Krishnan then heard the monkey calling out to him from the well. The Brahmin at once pulled the monkey out. The monkey thanked the Brahmin. "If you are ever in need of food, just drop in at my place below that big mountain. Bali is my name." Now the snake called out to him for help. "Help you!" exclaimed Krishnan, "You are a snake. What if you bite me?" "I shall never bite you," said the snake. So Krishnan pulled the snake out of the well. The snake said, "Remember, if you are ever in any difficulty, just call out my name - Naagesh, and wherever you are, I shall find you." The jaguar, the monkey and the snake took leave of the Brahmin. But before they left, they spoke to him about the man in the well. "Please do not help him," said Shersingh, "If you do," said Naagesh, "you will be in trouble yourself." As soon as they left, the man in the well began to call out for help. Krishnan felt sorry for the man and pulled him out of the well. "Thank you for your kindness," said the man. "I am Seth Ghanshyamdas. I am a goldsmith. If you ever need my help, don't hesitate to visit my **humble** house near the city. The goldsmith then left for home.

After some time, the Brahmin **continued** his journey. But he could not find any work. He then remembered Shersingh, Bali, Naagesh and Seth Ghanshyamdas. He thought it was time to **seek** their help. He first went to Bali. The monkey was overjoyed to see him. He gave him a warm welcome and offered him some really delicious fruits. The Brahmin told him how grateful he was. Now Krishnan went to see Shersingh, the jaguar. As soon as Shersingh saw Krishnan coming, he ran out to welcome him. He gave Krishnan a beautiful gold necklace and other precious jewellery. Krishnan thanked Shersingh for the jewellery and parted. His journey had at last brought him luck, he thought. He would be able to sell the ornaments for a good price. But who could help him to sell the ornaments? He then remembered Seth Ghanshyamdas. He went to him. The goldsmith was glad to see Krishnan. "I have come to ask for your help," said Krishnan. "Here are some ornaments. Please give me a good price for them," Seth Ghanshyamdas took the jewellery and examined it carefully. "I shall certainly help you," he said, "But let me show them to another goldsmith. Please wait here, I will be right back." He then went out with the ornaments. Seth at once rushed to the Palace of the King. He said, "A man brought these ornaments to me and asked me to sell them. But they are the ornaments I made for the Prince

who is missing. "Who is this man? Where is he?" thundered the King. "This rogue must have murdered my little Prince and robbed his jewels!" "He is a Brahmin named Krishnan, Your Majesty", replied the goldsmith, "and he is there, in my house." The King called for his most dreaded soldiers. "Arrest the Brahmin who is in the goldsmith's house and throw him into the darkest dungeons of the kingdom," roared the king. The King's guard stormed into the goldsmith's house and seized Krishnan. Krishnan was thrown into a dark dungeon to await his execution. He then remembered the words of Naagesh, the snake. So he called out to him. Suddenly, almost like magic, Naagesh slithered his way down a narrow window into the dingy cell. "O, Lord!" hissed Naagesh, how did you manage to get yourself arrested?" Krishnan cried and then told the snake what had happened. "I have a plan," hissed Naagesh. "I shall creep into the Queen's room and bite her," said Naagesh. "She will remain asleep. The poison will remain in her body until you place your hand on her body until you place your hand on her forehead," explained Naagesh. He then left Krishnan and went to the palace. He crept into the Queen's room and bit her. The Queen fainted, the sad news that the Queen had been bitten by a snake spread all over the Kingdom. Vaidyas came from far and near, but their medicines had no effect. No one could revive the Queen. Finally, the King declared that anyone who could cure the Queen would be **handsomely** rewarded. Many people went to the palace but all of them failed. "I can cure the Queen," Krishnan told the guards. At once they took him to the palace and the King took him to the Queen. Krishnan sat beside the Queen and placed his hand on her forehead. Soon, she opened her eyes and sat up. The King was overjoyed and shed tears of happiness. He embraced Krishnan and thanked him. "You Majesty," said Krishnan, "I was sent to prison for a crime I did not commit," Krishnan told the King the whole story. The King was fuming with the whole story. The King was fuming with rage when he heard what the goldsmith had done. He at once had the goldsmith arrested. The King then presented Krishnan with a large house and a thousand pieces of gold. Krishnan sent for his family and they all lived happily ever after.

41. Why was Krishnan afraid to save Naagesh from the well?

1. As Naagesh had threatened Him with dire consequences
2. As he thought Naagesh would eat him.
3. As he thought Naagesh would bite him once he was out of the well
4. As he thought that Naagesh would capture him as soon as he got out of the well.
5. None of these

42. What did the King do to save the Queen after even the Vaidyas failed to revive her?

1. He punished the snake for having harmed the Queen
2. He announced a reward to anyone who could cure the Queen
3. He immediately called for Krishnan to cure the Queen
4. He asked his guards to immediately look for someone who could cure the Queen
5. None of these

44. What did the King do on learning the truth about Krishnan and Seth Ghanshyamadas?

1. He put Krishnan back in the dungeon as he still held Krishnan responsible for the Prince's death
2. He called for Krishnan's wife and family
3. He presented gold to Krishnan and also a house to live in
4. He congratulated the snake on his efforts to save Krishnan

5. None of these
45. **What plan did Naagesh have to save Krishnan from the dungeon?**
1. That he would sneak Krishnan out of the dungeon without anyone noticing.
 2. That he would bite the King and make him unconscious.
 3. That he would bite Krishnan and make everyone believe that he was dead.
 4. That he would enter the Queen's chamber and scare her.
 5. None of these
46. **What did Bali do after seeing Krishnan at his house?**
- A. He gave Krishnan directions to Shersingh's house.
 - B. He welcomed Krishnan to his house.
 - C. He offered tasty fruits to Krishnan.
1. Only A
 2. Only B
 3. Only C
 4. Only B and C
 5. Only A and C
47. **Why did the jaguar, the monkey and the snake tell Krishnan not to save the man in the well?**
1. As the man in the well was a goldsmith
 2. As the man in the well had cheated the snake, the monkey and the jaguar
 3. As the man in the well was a thief
 4. As the snake, the monkey and the jaguar hated the man as they had known him for a very long time
 5. None of these
48. **Why did Krishnan go to meet Seth Ghanshyamdas?**
1. As he thought that Seth Ghanshyamdas could help him in selling the ornaments gifted to him by Shersingh
 2. As he knew that Seth Ghanshyamdas had contact with the King which could prove to be beneficial
 3. As Seth Ghanshyamdas had requested Krishnan to sell ornaments only to him
 4. As Krishnan was extremely fond of Seth Ghanshyamdas
 5. None of these
49. **Why did Krishnan decide to leave his village?**
1. As he could not find much work in his own village and his family had to starve sometimes because of it
 2. As his family had requested him to do so.
 3. As his village people had asked him to leave their village and look for work somewhere else.
 4. As he wanted to search for food in a village different from his own.
 5. None of these
50. **What can possibly be the moral of the story?**
1. Trust oneself before trusting others
 2. A good deed never goes unrewarded
 3. You cannot change people but you can change yourself
 4. Try and try until you succeed
 5. One must be the change one wishes to see in this world

Directions (51-53): Choose the word/group of words which is **most similar** in meaning to the word/group of words printed in **bold** as used in the passage.

51. **HUMBLE**

1. elegant
2. polite
3. modest
4. real
5. vast

52. **SEEK**

1. hunt for
2. watch for
3. mention
4. ask for
5. force

53. **GO**

1. report
2. live
3. send
4. leave
5. depart

Directions(54-55): Choose the word/group of words which is **most opposite** in meaning to the word/group of words printed in **bold** as used in the passage.

54. **HANDSOMELY**

1. meagerly
2. tidily
3. ugly
4. raggedly
5. plenty

55. **CONTINUED**

1. remanded
2. presented
3. rested
4. carried on
5. stopped

Directions(55-60): Rearrange the following six sentences A, B, C, D, E, and F in the proper sequence to form a meaningful paragraph; then answer the questions given below them.

- A. On touring the whole world and finding no couple who was perfectly happy, the young couple understood that it is very difficult to find perfect happiness anywhere in the world.
- B. There was a young couple who led a very happy life together.
- C. One day, they heard that a wise old man had come to town, he could solve all kinds of problems and guide people.
- D. The wise old man told them; "Travel around the world and seek a man and a woman who are perfectly happy as a couple."
- E. So the couple decided to visit the wise old man and tell him their worry.
- F. The only thing that they worried about was, whether their happiness would last forever or would they too have to face problems.

56. **Which of the following should be the LAST (SIXTH) sentence after rearrangement?**

1. A
2. D
3. D
4. E
5. F

57. **Which of the following should be the THIRD sentence after rearrangement?**

1. A
2. B
3. D
4. D
5. E

58. **Which of the following should be the FOURTH sentence after rearrangement?**

1. B
2. C
3. D
4. E
5. F

59. **Which of the following should be the SECOND sentence after rearrangement?**

1. A
2. B
3. C
4. D
5. F

60. **Which of the following should be the FIRST sentence after rearrangement?**

1. A
2. B
3. C
4. D
5. E

Directions(61-65): Which of the phrases 1, 2, 3, and 4 given below each sentence should replace the phrase printed in **bold** in the sentence to make it grammatically correct? If the sentence is correct as it is given and no correction is required, mark 5 as the answer.

61. **He told his employer of his plans to leave the business to lead a more leisure life.**

1. more leisurely life
2. many leisurely life
3. many leasured life
4. more leisurely life
5. No correction required

62. **All she could think about was the beautiful dress and how she could earn enough money to buy it.**

1. All she can think
2. All she could thought
3. All she can thought

4. All she can thinking
5. No correction required
63. A young and successful executive was travelling down a neighbourhood street, going a bit to fast in his new car.
1. a bit too fastly 2. a bit as fast
3. a bit to fastly 4. a bit too fast
5. No correction required
64. Padma could convince anyone with her talks as she had the gift of the gabbing.
1. gifting of the gabbing 2. gift of the gab
3. gifting of the gab 4. gift off the gab
5. No correction required
65. For countries undergoing a recession, large cuts in public spending seem to be the ordering of the day.
1. be the ordering of days 2. being the order of the day
3. be the order of the day 4. being the ordering of days
5. No correction required

Directions(66-70): In each question below, a sentence with four words printed in **bold** type is given. These are numbered as 1, 2, 3, and 4. One of these four words printed in **bold** may be either **wrongly spelt or inappropriate** in the context of the sentence. Find out the word which is **wrongly spelt or inappropriate**, if any. The number of that word is your answer. If all the words printed in **bold** are correctly spelt and also appropriate in the context of the sentence, mark 5 i.e. 'All correct' as your answer.

66. When the young artist **returned** (1) / to his village, his family held a **festive** (2) / dinner on its lawn to celebrate his **triumphant** (3) / **homecoming**. (4) / All correct (5)
67. She trusted Mira with all her **heart** (1) / and thus **handled** (2) / over her **life's** (3) / savings to her **instantly**. (4) / All correct (5)
68. It is **difficult** (1) / to see the **picture** (2) / when you are inside 3/ the **frame**. (4) / All correct (5)
69. Had she not **suppressed** (1) / all the details of her Company's **project**, (2) / her Company would have **bagged** (3) / the contract. 4 / All correct (5)
70. The **whole** (1) / time she walked with her child in her arms the only **thing** (2) / that **worried** (3) / her was her son's **feature**. (4) / All correct (5)

Directions(71-80): In the following passage there are blanks, each of which has been numbered. These numbers are printed below the passage and against each, five words are suggested, one of which fits the blank appropriately. Find out the appropriate word in each case.

One day a father of a very wealthy family (71) his son on a trip to the country with the purpose of (72) his son how the poor people live so he could be thankful for his wealth. They spent a (73) of days and nights on the farm of what would be considered a (74) poor family. On their (75) from their trip, the father asked his son, "How was the trip? "It was great, Dad", "Did you see how poor people can be?" the father asked. "Oh yeah" said the son. "So what did you (76) from the trip?" asked the father. The son answered, "I saw that we have one dog and they had four. We have a pool that (77) to the middle of our garden and they have a creek that has no end." "We have imported lanterns on our garden and they have the stars at night." "Our patio reaches to the front yard and they have the (78) horizon" "We have a small piece of land to live on and they have fields that go beyond our sight." "We have (79) who serve us, but they serve others." "We buy our food, but they grow theirs." "We have walls around our (80) or protection, they have friends to protect them." With this boy's father was speechless. Then his son added, "Thanks dad for showing me how poor we are."

71. 1. mould 2. showed 3. took 4. beat
5. drag
72. 1. trusting 2. showing 3. presenting 4. requesting
5. tell
73. 1. few 2. many 3. two 4. couple
5. much
74. 1. very 2. astutely 3. major 4. some
5. sorrow
75. 1. return 2. walking 3. lane 4. journey
5. leave
76. 1. believe 2. learn 3. reveal 4. think
5. saw
77. 1. leak 2. watery 3. stands 4. reaches
5. swims
78. 1. last 2. lucky 3. more 4. scene
5. whole
79. 1. relatives 2. man 3. servants 4. mother
5. computers
80. 1. pillars 2. country 3. minds 4. selves
5. property

QUANTITATIVE APTITUDE

Directions (81-95): What will come in place of the question mark (?) in the following questions?

81. $\frac{5}{9}$ of 504 + $\frac{3}{8}$ of 640 = ?
1. 520 2. 480 3. 460 4. 540
5. None of these
82. $\frac{4}{9}$ of $\frac{3}{8}$ of $\frac{2}{7}$ of 294 = ?
1. 24 2. 14 3. 16 4. 22
5. None of these
83. 16% of 250 + 115% of 480 = ?
1. 522 2. 588 3. 582 4. 498
5. None of these
84. $16.45 \times 2.8 + 4.5 \times 1.6 = ?$
1. 56.23 2. 56.32 3. 53.26 4. 53.66
5. None of these
85. 55% of 860 + 7% of 450 = 581
1. 24 2. 28 3. 32 4. 36
5. None of these
86. $1740 + 12 \times 4070 + 110 = ?$
1. 5635 2. 5965 3. 5465 4. 5445
5. None of these
87. $72.42 + 385.66 + 4976.38 = ?$
1. 5234.46 2. 5434.46 3. 5434.66 4. 5244.66
5. None of these
88. $8\frac{5}{9} \times 4\frac{3}{5} - 6\frac{1}{3} = ?$
1. $32\frac{11}{45}$ 2. $33\frac{11}{45}$ 3. $32\frac{1}{45}$ 4. $33\frac{1}{45}$
5. None of these
89. $5760 + 45 \times 15 = ?$
1. 1890 2. 1828 3. 1820 4. 1928
5. None of these
90. $9845 - 3896 + 486 = ? - 1128$
1. 7365 2. 7463 3. 7536 4. 7653
5. None of these
91. $22^2 + \sqrt{?} = 529$
1. 45 2. 2045 3. 2025 4. 48
5. None of these
92. $\frac{17 \times 4 + 4^2 \times 2}{90 + 5 \times 12} = ?$
1. $\frac{25}{54}$ 2. $\frac{22}{57}$ 3. $\frac{11}{27}$ 4. $\frac{13}{27}$
5. None of these

93. $2520 \div 14 \div 9 = ?$
 1. 22 2. 18 3. 20 4. 16
 5. None of these
94. $8\frac{2}{5} \times 5\frac{2}{3} + ? = 50\frac{1}{5}$
 1. $3\frac{3}{5}$ 2. $2\frac{2}{5}$ 3. $3\frac{2}{5}$ 4. $2\frac{3}{5}$
 5. None of these
95. $3.2\% \text{ of } 250 + 1.8\% \text{ of } 400 = ?$
 1. 14.8 2. 15.75 3. 14.75 4. 15.2
 5. None of these
- Directions(96-100):** What will come in place of the question mark (?) in the following number series?
96. 11 13 16 20 ?
 1. 24 2. 26 3. 28 4. 27
 5. None of these
97. 7 13 25 49 ?
 1. 99 2. 97 3. 89 4. 87
 5. None of these
98. 608 304 152 76 ?
 1. 39 2. 36 3. 38 4. 37
 5. None of these
99. 8 9 20 63 ?
 1. 256 2. 252 3. 246 4. 242
 5. None of these
100. 5 6 10 19 ?
 1. 28 2. 37 3. 36 4. 35
 5. None of these
101. Difference between the digits of a two digit number is 5 and the digit in the unit's place is six times the digit in the ten's place. What is the number?
 1. 27 2. 72 3. 16 4. 61
 5. None of these
102. Find the average of the following set of numbers. 132, 148, 164, 128, 120, 136
 1. 142 2. 136 3. 138 4. 144
 5. None of these
103. Which set of the following fractions is in descending order ?
 1. $\frac{7}{8}, \frac{5}{7}, \frac{2}{3}, \frac{3}{5}$ 2. $\frac{3}{5}, \frac{2}{3}, \frac{5}{7}, \frac{7}{8}$
 3. $\frac{7}{8}, \frac{5}{7}, \frac{3}{5}, \frac{2}{3}$ 4. $\frac{2}{3}, \frac{3}{5}, \frac{5}{7}, \frac{7}{8}$
 5. None of these
104. Populations of two villages X and Y are in the ratio of 5:7 respectively. If the population of village Y increased by 25000 and the population of village X remains unchanged the respective ratio of their populations becomes 25 : 36. What is the population of village X?
 1. 6,25,000 2. 6,75,000 3. 8,75,000 4. 9,00,000
 5. None of these
105. The 56% of a number is less than its 72% by 56. What is 70% of that number?
 1. 300 2. 235 3. 240 4. 350
 5. None of these
106. A 240 metre long train crosses a 300 metre long platform in 27 seconds. What is the speed of the train in kmph?
 1. 66 2. 60 3. 76 4. 64
 5. None of these
107. Vandana sells an article for Rs. 3240 and earns a profit of 20%. What is the cost price of the article?
 1. Rs. 2,800 2. Rs. 2,820 3. Rs. 2,750 4. Rs. 2,700
 5. None of these
108. 16 men can complete a piece of work in 7 days. In how many days will 28 men complete the same work?
 1. 6 days 2. 8 days 3. 3 days 4. 4 days
 5. None of these

109. Sum of five consecutive even numbers is 380. What is the second number in ascending order?
 1. 76 2. 78 3. 74 4. 72
 5. None of these
110. Cost of 6 dozen apples and 8 dozen bananas is Rs. 1400. What will be the cost of 15 dozen apples and 20 dozen bananas?
 1. Rs. 3,200 2. Rs. 3,500 3. Rs. 3,600 4. Rs. 4,200
 5. None of these
111. Beena and Meena started a boutique investing amounts of Rs. 35,000 and Rs. 56,000 respectively. If Beena's share in the profit earned by them is Rs. 45,000 what is the total profit earned?
 1. Rs. 81,000 2. Rs. 1,27,000
 3. Rs. 72,000 4. Rs. 1,17,000
 5. None of these
112. Simple interest accrued on an amount in eight years at the rate of 11 p.e.p.a. is Rs. 57,200. What was the principal amount?
 1. Rs. 72,000 2. Rs. 82,000 3. Rs. 75,000 4. Rs. 65,000
 5. None of these
113. Mr. Sharma invested an amount of Rs. 25,000 in fixed deposit at compound interest at the rate of 8 p.e.p.a. for two years. What amount Mr. Sharma will get on maturity?
 1. Rs. 25,540 2. Rs. 29,160 3. Rs. 29,240 4. Rs. 28,240
 5. None of these
114. Four-seventh of a number is equal to 40% of another number. What is the ratio between the first number and the second number respectively?
 1. 5 : 4 2. 4 : 5 3. 10 : 7 4. 7 : 10
 5. None of these
115. Nandkishore gives 35% of the money he had to his wife and gave 50% of the money he had to his sons. Remaining amount of Rs. 11,250 he kept for himself. What was the total amount of money Nandkishore had?
 1. Rs. 63,750 2. Rs. 75,000
 3. Rs. 73,650 4. Rs. 72,450
 5. None of these

Discipline Institute	Art	Commerce	Science	Management	Computer Science
A	350	260	450	140	300
B	240	320	400	180	320
C	460	300	360	160	380
D	440	480	420	120	340
E	280	360	340	200	330

116. Number of students studying Commerce from Institute D is what per cent of the total number of students studying all the disciplines together from this Institute?
 1. $28\frac{1}{3}$ 2. $26\frac{2}{3}$ 3. $24\frac{2}{3}$ 4. $24\frac{1}{3}$
 5. None of these
117. What is the average number of students studying all disciplines together from Institute E?
 1. 312 2. 310 3. 302 4. 304
 5. None of these
118. What is the ratio between total number of students studying Science from Institutes C and D together and the total number of students studying Computer Science from these two Institutes together respectively?
 1. 13 : 12 2. 12 : 13 3. 13 : 15 4. 15 : 13
 5. None of these

119. What is the average number of students studying Commerce from all the Institutes together?
 1. 356 2. 360 3. 348 4. 340
 5. None of these
120. Total number of students studying Arts from Institutes A and B together is approximately what per cent of the total number of students studying Computer Science from these two Institutes?
 1. 84 2. 85 3. 88 4. 90
 5. None of these

REASONING ABILITY

121. In a certain code BROWN is written as 531@ and MEAN is written as 26@%. How is ROBE written in that code?
 1. 3@16 2. 3516 3. 3156 4. 3@16
 5. None of these
122. In a row of forty students R is fifth from the right end and there are ten students between R and D. What is the D's position from the left end of the row?
 1. 26th 2. 23th 3. 24th 4. 25th
 5. Data Inadequate
123. Among A, B, C, D and E each having scored different marks in an examination, B scored more than C and E and less than A and D. C's marks are not the lowest. Who scored the lowest marks?
 1. D 2. C
 3. B 4. Data inadequate
 5. None of these
124. How many pairs of digits are there in the number 943 658 each of which has as many digits between them as when the digits are rearranged in ascending order?
 1. None 2. One 3. Two 4. Three
 5. More than three
125. How many meaningful English words can be made with the letters VLEI using each letter only once in each word?
 1. None 2. One 3. Two 4. Three
 5. More than three
126. How many such pairs of letters are there in the word OVERWHELM each of which has as many letters between them in the word as in the English alphabet?
 1. None 2. One 3. Two 4. Three
 5. More than three
127. What should come next in the following letter series?
 ACEGIKMOBDFHJLNACEGIKMBDFHJLA
 1. B 2. C 3. F 4. D
 5. None of these
128. In a certain code ORBITAL is written as CSPHMBU. How is CHARGER written in that code?
 1. BIDQSFH2. BIDSSFH 3. BIDQQDF 4. DIBQSFH
 5. None of these
129. Four of the following five are alike in a certain way and so form a group. Which is the one that does not belong to that group?
 1. 196 2. 256 3. 529 4. 576
 5. 324
130. Four of the following five are alike in a certain way and so form a group. Which is the one that does not belong to that group?
 1. RPN 2. WSU 3. HDF 4. LHJ

5. QMO
131. If '+' means 'divided by'; '-' means 'added to'; 'x' means 'subtracted from' and '÷' means 'multiplied by then'
 $26 - 15 + 5 \times 4 + 2 = ?$
 1. 15 2. 20 3. 25 4. 18
 5. None of these

Directions (132-137): Study the following arrangement given carefully and answer the questions given below.

R 5 # 3 \$ M D F 1 4 F @ A 6 E W J 2 @ 5 K 8 Q 7 % U
 T I * V 9

132. Which of the following is the seventh to the left of the nineteenth from the left end of the above arrangement?
 1. D 2. U 3. @ 4. 5
 5. None of these
133. What should come next in the following series based on the above arrangement?
 53\$ P4E 6WJ 88Q
 1. UI* 2. UT* 3. UIV 4. UTV
 5. None of these
134. How many such consonants are therein the above arrangement each of the which is immediately preceded by a letter and immediately followed by a number?
 1. None 2. One 3. Two 4. Three
 5. More than three
135. If all the symbols in the above arrangement are dropped, which of the following will be the sixteenth from the right end?
 1. F 2. W 3. J 4. 5
 5. None of these
136. How many such symbols are there in the above arrangement each of which is immediately preceded by a number and immediately followed by a consonant?
 1. None 2. One 3. Two 4. Three
 5. More than three
137. How many such vowels are there in the above arrangement each of which is immediately preceded by a symbol and immediately followed by a number?
 1. None 2. One 3. Two 4. Three
 5. More than three

Directions (138-143): In the following questions, the symbols &, \$, *, @ and © are used with the following meanings as illustrated below:

- 'P \$ Q' means 'P is neither equal to nor greater than Q'.
 'P © Q' means 'P is neither equal to nor smaller than Q'.
 'P 6 Q' means 'P is neither greater than nor smaller than Q'.
 'P @ Q' means 'P is not smaller than Q'.
 'P * Q' means 'P is not greater than Q'.

In each question three statements showing relationship have been given, which are followed by three conclusions I, II and III. Assuming that the given statements are, find out which conclusion (s) is/are definitely true?

138. **Statements:**
 B © N, N @ R, F * R
Conclusions:
 I. B © R
 II. F * N
 III. R \$ B
 1. Only I and II are true 2. Only II and III are true
 3. Only II and III are true 4. All I, II and III are true
 5. None of these
139. **Statements:**
 D \$ M, M * B, B 6 J

Conclusions:

I. J @ D

II. B @ D

III. J @ M

1. Only I and II are true 2. Only I and III are true
3. Only II and III are true 4. All I, II and III are true
5. None of these

140. Statements:

F * T, T \$ N, N @ R

Conclusions:

I. R \$ T

II. N @ F

III. F \$ R

1. None is true 2. Only I is true
3. Only II is true 4. Only III is true
5. Only II and III are true

141. Statements:

W \$ K, K @ F, F \$ M

Conclusions:

I. M @ K

II. W @ K

III. F @ W

1. Only I is true 2. Only II is true
3. Only III is true 4. Only II and III are true
5. None of these

142. Statements:

M @ D, D \$ K, K @ R

Conclusions:

I. R \$ M

II. K \$ M

III. D @ T

1. Only II and III are true 2. Only I and III are true
3. Only I and II are true 4. All, I, II and III are true
5. None of these

143. Statements:

F @ T, T \$ K, K * D

Conclusions:

I. D @ F

II. F @ K

III. D @ T

1. Only II and III are true 2. Only I and III are true
3. Only I and II are true 4. All I, II and III are true
5. None of these

Directions (144-149): Study the following information carefully and answer the questions given below:

P, A, D, Q, T, M, T and B are sitting around a circle facing at the centre. D is third to the left of T who is fifth to the right of P. A is third to the right of B who is second to the right of D. Q is the second to the left of M.

144. Who is second to the right of M?

1. B 2. R 3. T 4. Q
5. None of these

145. Who is to the immediate right of D?

1. M 2. Q
3. B 4. Data inadequate
5. None of these

146. Who is third to the right of P?

1. D 2. M
3. R 4. Data inadequate
5. None of these

147. Who is second to the left of D?

1. A 2. Q 3. B 4. P
5. Data inadequate

148. In which of the following pairs the first person is sitting to the immediate right of the second person?

1. DM 2. BT 3. RA 4. PQ
5. PA

149. Which of the following pairs represents the immediate neighbours of A?

1. PT 2. PB 3. TQ 4. PD
5. None of these

Directions (150-155): In each question below are three statements followed by three conclusions numbered I, II and III. You have to take the three given statements to be true even if they seem to be at variance from commonly known facts and then decide which of the given conclusions logically follows from the three given statements disregarding commonly known facts. Then decide which of the answer 1, 2, 3, 4, and 5 is the correct answer.

150. Statements:

Some bikes are cars
Some cars are trains
Some trains are buses

Conclusions:

- I. Some buses are cars.
II. Some trains are bikes
III. Some buses are bikes
1. None follows
2. Only I follows
3. Only II follows
4. Only III follows
5. Only I and II follow

151. Statements:

All dogs are cats
Some cats are rats
All rats are mats

Conclusions:

- I. Some mats are cats
II. Some mats are dogs
III. Some rats are cats
1. Only I follows 2. Only II follows
3. Only III follows 4. Only I and III follow
5. None of these

152. Statements:

All cups are benches
Some benches are drums
All drums are kites

Conclusions:

- I. Some kites are cups
II. Some kites are benches
III. Some drums are cups
1. None follows 2. Only I follows
3. Only II follows 4. Only III follows
5. Only II and III follow

153. Statement:

Some boxes are walls
No wall is road
All roads are rivers

Conclusions:

- I. Some rivers are walls
II. Some roads are boxes
III. No wall is follows
1. Only I follows 2. Only either I or III follows
3. Only III follows 4. Only II follows
5. Only II and III follow

154. Statement:

Some tables are chairs
All chairs are houses
All houses are tents

Conclusions:

- I. All houses are chairs
II. Some tents are chairs
III. Some houses are tables

1. Only I and II follow
2. Only I and III follow
3. Only II and III follow
4. All I, II and III follow
5. None of these

155. **Statement:**

- All pens are sticks
- All sticks are rings
- All rings are roads

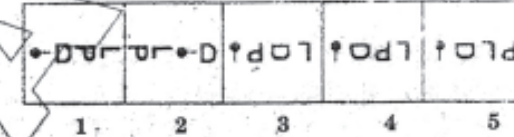
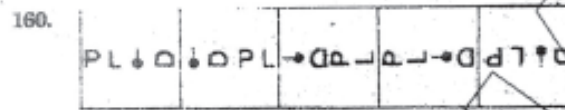
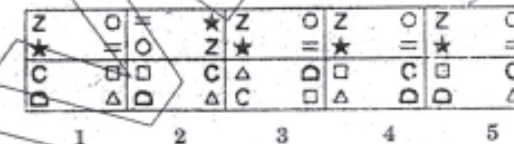
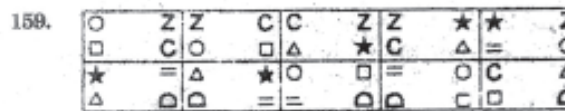

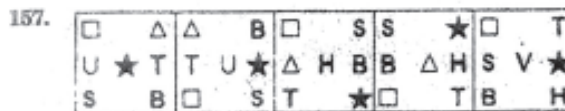
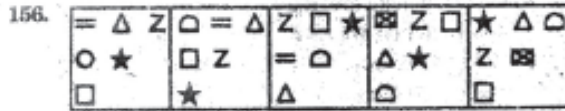
Conclusions:

- I. Some rings are pens
 - II. Some rods are sticks
 - III. Some rods are pens
1. Only I and II follow
 2. Only I and III follow
 3. Only II and III follow
 4. All I, II and III follow
 5. None of these

Directions (156-160): In each of the questions given below which one of the five answer figures on the right should come after the problem figures on the left. If the sequence were continues?

PROBLEM FIGURES

ANSWER FIGURES



MARKETING APTITUDE / COMPUTER KNOWLEDGE

161. CPU stands for —
 1. Computer processing Unit
 2. Central Processing Unit
 3. Computer Protection Unit
 4. Central Processing Upload
 5. None of these
162. The primary purpose of software is to turn data into —
 1. web sites
 2. information
 3. programs
 4. objects
 5. None of these
163. A compiler translates a program written in a high-level language into —
 1. machine language
 2. an algorithm
 3. a debugged program
 4. java
 5. None of these
164. What is correcting errors in a program called?
 1. Compiling
 2. Debugging
 3. Grinding
 4. Interpreting
 5. None of these
165. The _____ of a system includes the programs or instructions.
 1. hardware
 2. icon
 3. information
 4. software
 5. None of these
166. Back up of the data files will help to prevent —
 1. loss of confidentiality
 2. duplication of data
 3. virus infection
 4. loss of data
 5. None of these

167. Text in a column is generally aligned —
 1. justified
 2. right
 3. centre
 4. left
 5. None of these
168. The background of any word document —
 1. is always white colour
 2. is the colour you present under the Options menu
 3. is always the same for the entire document
 4. can have any colour you choose
 5. None of these
169. In order to save an existing document with a different name you need to —
 1. Retype the document and give it a different name
 2. Use the Save as... command
 3. Copy and paste the original document to a new document and then save
 4. Use Windows Explorer to copy the document to a different location and then rename it
 5. None of these
170. Which one of the following software applications would be the most appropriate for performing numerical and statistical calculations?
 1. Database
 2. Document processor
 3. Graphics package
 4. Spreadsheet
 5. None of these
171. What would you do to highlight a word? You position the cursor next to the word, and then —

1. Drag mouse while holding button down
 2. Click mouse once
 3. Roll mouse around,
 4. Roll and then click mouse
 5. None of these
172. A — contains specific rules and words that express the logical steps of an algorithm.
1. programming language
 2. syntax
 3. programming structure
 4. logic chart
 5. None of these
173. What is the default file extension for all word documents?
1. TXT 2. WRD 3. FIL 4. DOC
 5. None of these
174. Which is the part of the computer system that one can physically touch?
1. data 2. operating systems
 3. hardware 4. soft ware
 5. None of these
175. In page preview mode—
1. You can see all pages of your document
 2. You can only see the page you are currently working
 3. You can only see pages that do not contain graphics
 4. You can only see the title page of your document
 5. None of these
176. Cross selling is very effective in the sale of one of the following
1. Debit cards 2. Credit cards
 3. Internet banking 4. Auto loans
 5. All of these
177. Cross selling means—
1. one salesman selling to another salesman
 2. selling across territories
 3. selling across countries
 4. selling additional products to existing customers
 5. All of these
178. Target market for Debit-Cards is
1. All existing account holders
 2. All sales persons
 3. All NRI's
 4. All HNI's
 5. All of these
179. Market Penetration can be possible through—
1. more calls to the same buyers
 2. More calls to many buyers
 3. surrogate marketing
 4. alternate marketing
 5. All of these
180. Cross selling can be resorted to by—
1. all sales persons 2. All employees
 3. all employers 4. outsourced agencies
 5. All service providers
181. Reusable optical storage will typically have the acronym—
1. CD- 2. DVD 3. ROM 4. RW
 5. None of these
182. — is processed by the computer into information.
1. Data 2. Numbers
 3. Alphabets 4. Pictures
 5. None of these
183. A— is an electronic device that process data, converting it into information.
1. computer 2. processor
 3. case 4. stylus
 5. None of these
184. Market innovations means—
1. design new products
 2. new styles of marketing
 3. new ideas in sales steps
 4. Only 1 and 2
 5. All 1 2 and 3
185. File extensions are used in order to —
1. name the file
 2. ensure the filename is not lost
 3. identify the file
 4. identify the file type
 5. None of these
186. Market penetration connotes—
1. Covering a wide area of the Market for sales
 2. Entering the buyers' houses
 3. Entering the sellers' houses
 4. Entering all shops and business house
 5. All of these
187. The most common type of storage devices are—
1. persistent 2. optical
 3. magnetic 4. flash
 5. None of these
188. SME means
1. Small And Medium Enterprises
 2. Small Marketing Enterprises
 3. Small Scale Marketing Entities
 4. Small And Medium Establishment.
 5. All of these
189. For successful marketing—
1. Only the sales person sells
 2. Only finance Departmentsells
 3. Only front office persons sell
 4. Only back office persons sells
 5. The whole organisation sells
190. Savings Accounts with zero balance can be opened for —
1. persons below BPL
 2. under Financial Inclusion scheme
 3. students
 4. as per Bank's Policies
 5. None of these
191. "Outsourcing" means service rendered by —
1. outside agencies
 2. other departments of the company
 3. employees, other than the sales persons
 4. marketing department
 5. All of these
192. In modern day marketing the benefits of selling extend to—
1. Only products and services
 2. Only after sales services
 3. Lifelong relationship with the buyer
 4. All of these
 5. None of these
193. One of the following is not a target group of SME loans—
1. All professionals 2. large industries
 3. truck operators 4. beauty parlours
 5. hotels and restaurants
194. The performance of a salesperson can be enhanced by—

1. increasing the sales incentives
2. increasing the number of products to be sold
3. appropriate training
4. All of these
5. None of these

195. Team building is required—

1. only for lead generation
2. only for after sales service
3. for cross selling
4. All of these
5. None of these

196. For sustained relationship with the buyer, one of the following is necessary—

1. Continuity
2. Consistency
3. Understanding
4. Empathy
5. All of these

197. Sales Promotion involves Find the incorrect option —

1. Building Product Awareness
2. Creating Interest
3. Providing Information
4. Designing new products
5. None of these

198. Target market for Home Loans is —

1. all builders
2. all housing societies
3. agriculturists
4. All of these
5. None of these

199. Lead generation is—

1. a pre-sales function
2. a function of the customer
3. a function of the manufacturing department
4. a postsales function
5. All of these

200. Financial Inclusion means —

1. Opening Accounts of Finance Companies
2. Financial Analysis of Balance
3. Opening Accounts of HNI's
4. Opening Accounts of NRI's
5. Opening Accounts of under privileged persons

KRISHNAVALLEN

SRI KRISHNA VENI BANKING COCHING CENTRE KEY SHEET -07

1) 2	2) 4	3) 4	4) 4	5) 3	6) 2	7) 5	8) 3	9) 5	10) 2
11) 4	12) 1	13) 2	14) 5	15) 4	16) 3	17) 1	18) 2	19) 4	20) 3
21) 2	22) 4	23) 4	24) 5	25) 5	26) 4	27) 3	28) 5	29) 2	30) 2
31) 4	32) 3	33) 2	34) 5	35) 1	36) 3	37) 2	38) 4	39) 3	40) 5
41) 3	42) 1	43) 4	44) 3	45) 5	46) 4	47) 5	48) 1	49) 1	50) 2
51) 3	52) 4	53) 2	54) 1	55) 5	56) 1	57) 3	58) 4	59) 5	60) 2
61) 1	62) 5	63) 4	64) 4	65) 3	66) 3	67) 2	68) 1	69) 5	70) 4
71) 3	72) 2	73) 4	74) 1	75) 1	76) 2	77) 4	78) 5	79) 3	80) 4
81) 1	82) 2	83) 5	84) 4	85) 1	86) 2	87) 2	88) 4	89) 5	90) 5
91) 3	92) 1	93) 3	94) 4	95) 4	96) 5	97) 2	98) 3	99) 1	100) 4
101) 3	102) 3	103) 1	104) 1	105) 5	106) 5	107) 4	108) 4	109) 3	110) 2
111) 4	112) 4	113) 3	114) 1	115) 5	116) 3	117) 1	118) 3	119) 1	120) 2
121) 2	122) 2	123) 2	124) 3	125) 5	126) 4	127) 1	128) 3	129) 1	130) 2
131) 4	132) 5	133) 5	134) 1	135) 4	136) 3	137) 2	138) 4	139) 4	140) 1
141) 2	142) 3	143) 5	144) 4	145) 2	146) 2	147) 1	148) 2	149) 4	150) 4
151) 1	152) 4	153) 2	154) 4	155) 1	156) 1	157) 4	158) 3	159) 2	160) 4
161) 2	162) 2	163) 1	164) 2	165) 4	166) 4	167) 1	168) 4	169) 2	170) 4
171) 1	172) 1	173) 4	174) 3	175) 2	176) 5	177) 4	178) 1	179) 2	180) 2
181) 4	182) 1	183) 2	184) 5	185) 4	186) 1	187) 2	188) 1	189) 5	190) 1
191) 1	192) 3	193) 2	194) 4	195) 3	196) 2	197) 4	198) 1	199) 1	200) 5